




November Do Now Calendar

Grade 1

Mon	Tue	Wed	Thu	Fri
<p>2</p> <p>15 children are playing at the park. 6 of the children had to go home. How many children are left at the park? Draw a picture to show your work.</p>	<p>3</p> <p>Cindy is 9 years old. Kim is 2 year younger than Cindy. How old is Kim? How do you know?</p>	<p>4</p> <p>Joey has 18 cookies in a cookie jar. Draw a cookie jar with fewer cookies than Joey has. Explain your drawing.</p>	<p>5</p> <p>No School NJEA Convention</p>	<p>6</p> <p>No School NJEA Convention</p>
<p>9</p> <p>I am the answer to $4 + 9$. What number am I? Draw and use a number line to help you. Explain how you found the answer.</p>	<p>10</p> <p>Jen has 15 markers. Alexis has 23 markers. Who has more? Tell how you know.</p>	<p>11</p> <p>No School Veteran's Day</p>	<p>12</p> <p>Jimmy thinks that $5 + 6 = 6 + 5$. Is he correct? Draw a picture to explain your answer.</p>	<p>13</p> <p>I am a flat shape with four equal sides. What am I? How do you know?</p>
<p>16</p> <p>Mr. Marks is thinking of a number. His number comes after 16 and before 18. What number is he thinking about? Show how you got your answer.</p>	<p>17</p> <p>Look at the pattern. Then, make the three shapes that come next.</p> <p></p> <p>____, _____, _____</p>	<p>18</p> <p>Create a story problem to illustrate the number sentence $7 + 8 = 15$.</p>	<p>19</p> <p>Dana has $6 + 9$. Aimee has 12. Who has more? Who has less? Explain how you know.</p>	<p>20</p> <p>Look around the classroom. Name three objects that are spheres. Draw the objects.</p>
<p>23</p> <p>There are three pairs of shoes on a shelf. Draw a picture to show how many shoes there are in all.</p>	<p>24</p> <p>Davon caught 18 fish while fishing with his uncle at the lake. If he took 9 fish home, how many fish did he put back into the lake? Explain how you solved the problem.</p>	<p>25</p> <p>1/2 Day – Thanksgiving Recess</p> <p>Kate, Bev and Greg all picked three apples. How many apples did they pick in all? Show your work.</p>	<p>26</p> <p>NO School Thanksgiving Recess</p>	<p>27</p> <p>No School Thanksgiving Recess</p>
<p>30</p> <p>Draw objects that create an A, B, B, pattern.</p>				



November Do Now Calendar

Grade 2

Mon	Tue	Wed	Thu	Fri
2 Gary has 1 ten and 8 ones. Cathy has 18. Who has more? How do you know?	3 How does knowing $15 + 6 = 21$ help you to solve $21 - \underline{\quad} = 15$? Explain your thinking.	4 Write a fact family using the following numbers. 3, 12, 9	5 No School NJEA Convention	6 No School NJEA Convention
9 Margie is three years older than Sid. Kate is 6 years younger than Sid. Sid is 15 years old. How old are Margie and Kate? Show how you solved the problem.	10 Over the weekend, Michael got 15 candy bars that he is planning to share with his friend Brett. If the boys share the candy bars equally, how many candy bars will they each get? Draw a picture to show your work.	11 No School Veteran's Day	12 Mother prepared 15 hot dogs for dinner. If Lee eats 2 of the hot dogs and Mekhi eats 3, how many hot dogs will be left? Use pictures, numbers, or words to show your work.	13 Brittany bought a book that has a total of 29 pages. If she reads 18 pages before going to the mall, how many pages will she have left to read? Explain your thinking.
16 There are two bowls with 9 blocks in each. How many blocks are there in all? Explain how you solve the problem.	17 Ken, Rob, and Ned all picked apples at the farm. If they each picked 8 apples, how many apples did they pick all together? Write a number sentence to solve the problem.	18 The rule for pattern below is adding 4. Write the numbers that complete the pattern. Tell how you know the numbers are correct. 2, 6, 10, <u> </u> , 18, <u> </u> , <u> </u>	19 Mrs. Finn has 12 pencils on her desk. If 5 pencils roll off, how many pencils will be left on the desk? Did you add or subtract to find the answer? Why?	20 Look at the numbers. Write the numbers in order from greatest to least. Tell how you know the order is correct. 29, 16, 51, 3, 80, 33
23 If it takes 6 ants to carry a berry, how many ants will it take to carry 3 berries? Draw a picture to explain your thinking.	24 Which symbol completes the number sentence? Use $>$, $<$, or $=$. $56 \underline{\quad} 29$	25 $\frac{1}{2}$ Day – Thanksgiving Recess Alex used 15 apples and 2 pears to make a fruit salad. How many pieces of fruit did he use? Show your work.	26 NO School Thanksgiving Recess	27 No School Thanksgiving Recess
30 Write a number sentence that you would use to check $17 - 8 = 9$.				



November Do Now Calendar

Grade 3

Mon	Tue	Wed	Thu	Fri
2 Mia had a math book with 85 pages. If she did 43 pages over the summer, how many pages are left in the book? Show your work.	3 Is 57 an even or odd number? Explain how you know your answer is correct.	4 Copy and complete the pattern. 1, 3, 7, 13, ____, 31, ____, 57	5 No School NJEA Convention	6 No School NJEA Convention
9 Round 638 to the nearest hundred. Explain your steps.	10 Erin has 3 hundred blocks and 4 ten sticks. Kiki has 34 ten sticks. Who has more? Who has less? How do you know?	11 No School Veteran's Day	12 There are 19 people waiting in line to buy trading cards. If Mario is fifth in line, how many people are behind him? Explain.	13 Write the number 458 in word form and expanded notation.
16 Cathy is sorting laundry for her mother. She sorts 12 brown socks, 16 white socks, and 10 blue socks. How many pairs of brown and white socks does Cathy sort in all? Write a number sentence and solve the problem.	17 Marty has 41 pieces of candy that he wants to share with his friend Marc. If they share the candy equally, how many pieces of candy will they each get? Draw a picture to explain how you solved the problem.	18 Use the clues to write a 4-digit number. The digits are 3, 5, 6, and 2. The number is odd. The number is the hundreds place is two times greater than the digit in the ones place. The number 2 is not in the tens place. What is the number?	19 A soda machine only takes quarter, dimes and nickels. It also only takes exact change. If a soda costs 65 cents, show which coins you would put into the machine. Is there another combination of coins you could use? Show your work.	20 Look at the numbers. Write the numbers in order from greatest to least. Tell how you know the order is correct. 129, 16, 351, 233, 808
23 Write the number three thousand, eight hundred four.	24 Alice says $153 + 248$ is about 300. Is her answer an overestimate or an underestimate? Explain your answer.	25 1/2 Day – Thanksgiving Recess Write the number two thousand five. Is this an odd or even number? Explain.	26 NO School Thanksgiving Recess	27 No School Thanksgiving Recess
30 There are 20 students in Mrs. Hall's class. Half of her students wear glasses. How many students do not wear glasses? Draw a picture to show your work.				



November Do Now Calendar

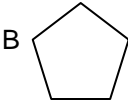
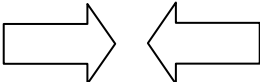
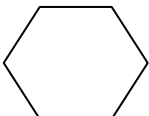
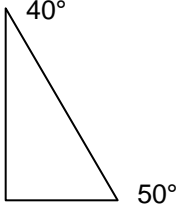

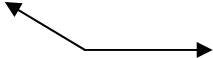
Grade 4

Mon	Tue	Wed	Thu	Fri																				
2 How does knowing $12 \times 5 = 60$, help you solve $60 \div \underline{\quad} = 12$? Explain your thinking.	3 Mrs. Baker wants to plant 40 tomato plants in her garden. She wants the same number of plants in each row. How many different ways can Mrs. Baker arrange her garden?	4 What is the missing number in the pattern? 222, 249, <u> </u> , 303, 330 How do you know your answer is correct?	5 No School NJEA Convention	6 No School NJEA Convention																				
9 Solve each number sentence. Then use $>$, $<$, or $=$. $45 + 77 - 15$ <u> </u> $64 + 33 - 19$	10 Erin has 3 hundred blocks and 4 ten sticks. Kiki has 34 ten sticks. Who has more? Who has less? How do you know?	11 No School Veteran's Day	12 Jane bought 3 hats for \$9 each. She also bought 2 packs of socks for \$5 each. How much did Jane spend? Show your work.	13 Write the number 2,408 in word form and expanded notation.																				
16 Copy and complete the table. What is the rule? <table border="1" style="margin: 10px auto; border-collapse: collapse;"> <tr><td style="padding: 2px;">In</td><td style="padding: 2px;">Out</td></tr> <tr><td style="padding: 2px;">2</td><td style="padding: 2px;">14</td></tr> <tr><td style="padding: 2px;"></td><td style="padding: 2px;">21</td></tr> <tr><td style="padding: 2px;">4</td><td style="padding: 2px;"></td></tr> <tr><td style="padding: 2px;">5</td><td style="padding: 2px;"></td></tr> </table>	In	Out	2	14		21	4		5		17 Marty has 40 pieces of candy that he wants to share with his friends Marc and Kevin. If they share the candy equally, how many pieces of candy will they each get? Draw a picture to explain how you solved the problem.	18 Use the clues to write a 4-digit number. The digits are 3, 5, 6, and 2. The number is odd. The number in the hundreds place is two times greater than the digit in the ones place. The number 2 is not in the tens place. What is the number?	19 Look at each number in the table. Complete the missing numbers and write the rule. <table border="1" style="margin: 10px auto; border-collapse: collapse;"> <tr><td style="padding: 2px;">IN</td><td style="padding: 2px;">81</td><td style="padding: 2px;">72</td><td style="padding: 2px;"></td><td style="padding: 2px;">45</td></tr> <tr><td style="padding: 2px;">OUT</td><td style="padding: 2px;">9</td><td style="padding: 2px;"></td><td style="padding: 2px;">3</td><td style="padding: 2px;"></td></tr> </table>	IN	81	72		45	OUT	9		3		20 Brad bought 3 items at the market. The total of all three items cost \$85. If the first item cost \$45, and the second item cost \$17, how much did the third item cost? Explain how you solved the problem.
In	Out																							
2	14																							
	21																							
4																								
5																								
IN	81	72		45																				
OUT	9		3																					
23 Put the numbers in order from greatest to least. 2,564, 1,287, 2,081, 3,743	24 108 parents attended the school program. If there were 9 chairs in each row, how many rows of chairs were needed? Show your work.	25 1/2 Day – Thanksgiving Recess Round 638 to the nearest hundred. Explain your steps.	26 NO School Thanksgiving Recess	27 No School Thanksgiving Recess																				
30 There are 24 students in Mrs. Hall's class. Half of her students wear glasses. How many students do not wear glasses? Draw a picture to show your work.																								



November Do Now Calendar

Grade 5

Mon	Tue	Wed	Thu	Fri
2 What type of angle describes angle B? 	3 Mark drew a parallelogram on the board. How many sets of parallel lines does a parallelogram have? Draw a picture to show your work.	4 What is the missing number in the pattern? 222, 249, ____, 303, 330 How do you know your answer is correct?	5 No School NJEA Convention	6 No School NJEA Convention
9 Add the following: 3 yd 8 ft + 5 yd 7 ft	10 Are the figures related by a translation, reflection or rotation? Explain your answer. 	11 No School Veteran's Day	12 While fishing with her father, Jodie caught a fish that weighed 28 ounces. How many pounds and ounces is the fish equal to? Explain how you know.	13 Lynn's mother wants to make a garden in her backyard. She decides that the garden will measure 6 feet by 11 feet. What is the area of the garden? Show how you know.
16 Carol has 24 small square tables that she wants to put together to make one large table. She wants to have the greatest perimeter possible. How should she arrange the tables? Show your work.	17 Marty has 54 pieces of candy that he wants to share with his friends Marc, Stan, and Kevin. If they share the candy equally, how many pieces of candy will they each get? Draw a picture to explain how you solved the problem.	18 How many lines of symmetry does the figure have? Copy the figure and show the lines of symmetry. 	19 Jim is putting holiday lights around his patio in the backyard. The patio is in the shape of a rectangle that measures 6 feet wide and 8 feet long. How many feet of lights will Jim need for his patio? Show your work.	20 Classify the triangle. 
23 Are the two figures similar? Why or why not? Explain. 	24 Classify the angles as acute, straight, obtuse or right. Then measure. 	25 1/2 Day – Thanksgiving Recess John started reading at 8:20. He read for 1 hour and 45 minutes. What time did John stop reading?	26 NO School Thanksgiving Recess	27 No School Thanksgiving Recess
30 Calvin is 58 inches tall, but his father is 6 feet 1 inches tall. How much taller is Calvin's father than Calvin? Show how you got your answer.				